

A. write the numbers from 1– 50

B. Count and write the number







IV. 

V. 

C. Fill n the missing numbers

51		53		55
	57			60
	62		64	
66		68		70
	72		74	

D. Write the number names

I. 1 - _____

II. 2- _____

III. 3- _____

IV. 4 - _____

V. 5 - _____

VI. 6 - _____


VII. 7- _____

VIII. 8 - _____


IX. 9 - _____

X. 10- _____



E. Colour the bigger object n each group.




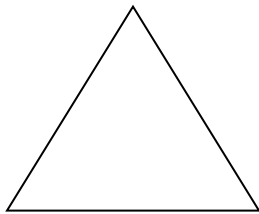
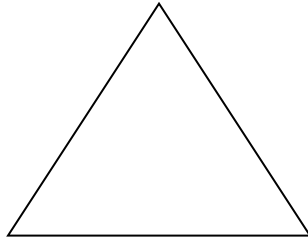

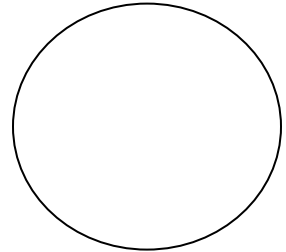
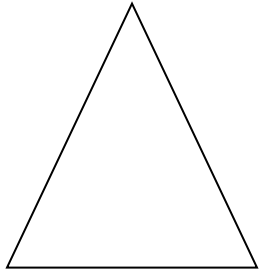
F. Colour the short object n each group.



G. Tick the box which has more objects/quantity and cross the box which has less objects/quantity.



H. Colour all the circles red, all the triangles blue and all the squares yellow.



J. Write the number that comes after.

- I. 5 _____
- II. 10 _____
- III. 14 _____
- IV. 7 _____
- V. 16 _____

VI. 19 _____

11. Write the number that comes before.

I. _____ 14

II. _____ 6

III. _____ 10

IV. _____ 20

V. _____ 12

VI. _____ 17

L. Write the number that comes n between.

I. 8 ___ 10

II. 6 ___ 8

III. 14 ___ 16

IV. 18 ___ 20